

Year 3
Half-termly Test Spring 1

Name: _____ Class: _____ Date: _____

1. $425 + 67 =$

A 10x10 grid with a rectangle drawn on the right side. The rectangle is 4 columns wide and 2 rows high, starting from the 7th column and the 8th row, and ending at the 10th column and the 10th row.

2. $329 + \square = 617$

[illegible]

Total for
this page

3. $\frac{1}{5}$ of 25 =

--	--

1 mark

4. $9 \div 10 =$

--	--

1 mark

5. $\frac{3}{10} + \frac{4}{10} =$

--	--

1 mark

--	--

Total for
this page

6. Write these numbers in order.

120

202

101

220

110

1 mark

7. Lola makes numbers using these digit cards.

3

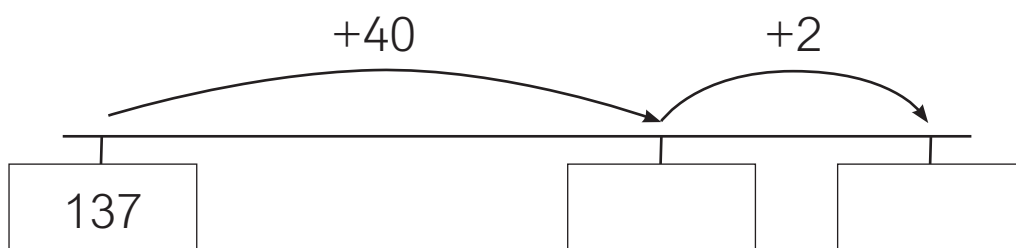
5

7

Write any number Lola makes that has 7 tens.

2 marks

8. Write the missing numbers in the boxes.



1 mark

Total for
this page

- 11.** 45 children go on a coach trip.

$\frac{1}{3}$ are girls.

How many are boys?

Show your method

A 10x10 grid with a thick black bar at the top and a box labeled 'boys' on the right.

2 marks

- 12.** Two fractions add up to one.

One of the fractions is $\frac{3}{4}$.

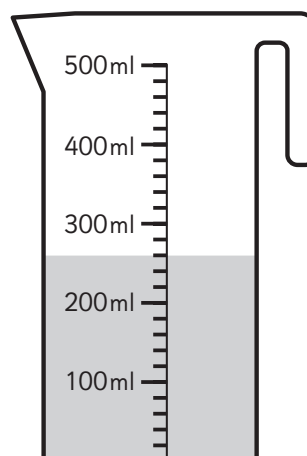
What is the other fraction?

1 mark

- 13.** How much water is in the jug?

Give your answer in ml.

ml

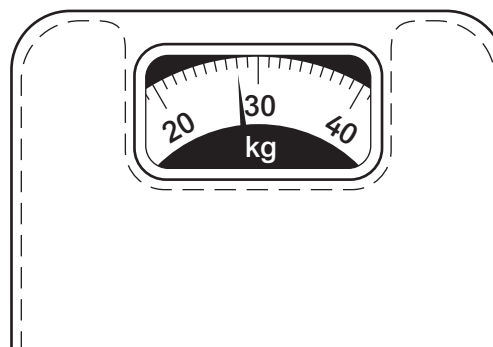


1 mark

- 14.** The scales show how much Kerry weighed a year ago.

She now weighs 4 kg more.

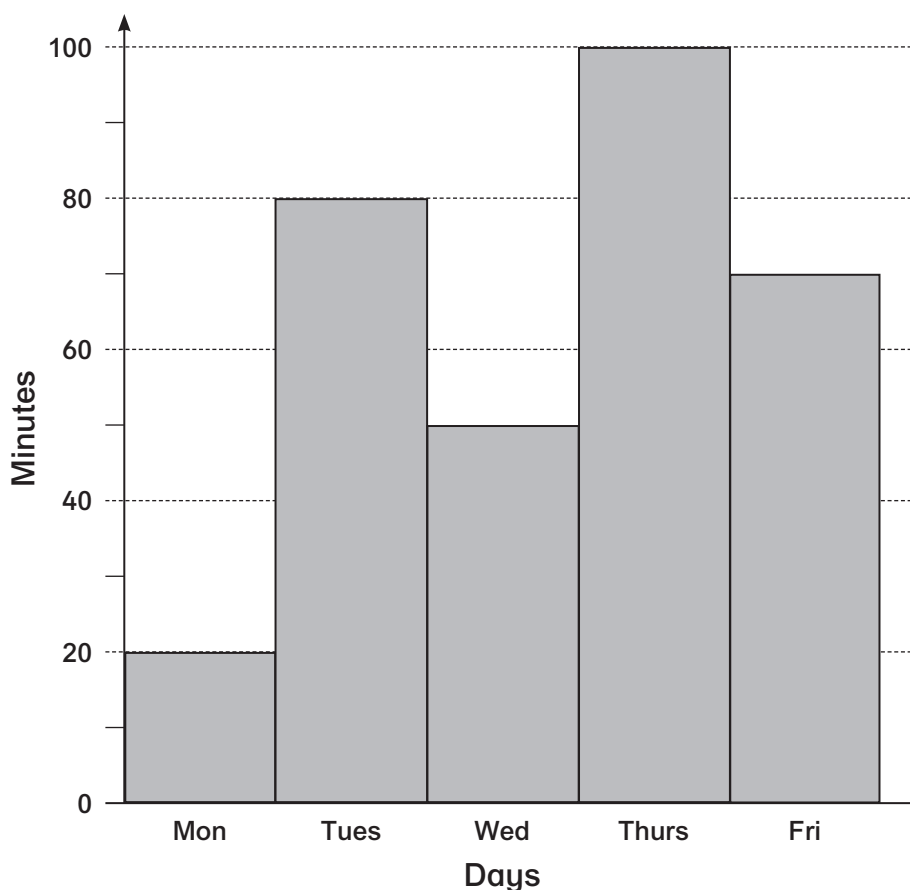
How much does Kerry weigh now?

kg

1 mark

Total for
this page

- 15.** The bar chart shows how many minutes Latisha worked on the computer over 5 days.



- a) How many minutes did Latisha work on the computer on Wednesday?

minutes

1 mark

- b) How much longer did Latisha work on the computer on Friday than on Monday?

minutes

1 mark

- c) Latisha says, "I worked on the computer for more than 1 hour on 3 days."

Explain how you know Latisha is correct.

1 mark

/20

Total for this test