

Year 3 Half-termly Test Spring 2

Name: _____ Class: _____ Date: _____

1. $97 \times 3 =$

A 10x10 grid with a rectangle drawn on the right side. The rectangle is 4 columns wide and 2 rows high, starting from the 7th column and the 8th row, and ending at the 10th column and the 10th row.

2.	$\div 8 = 14$
----	---------------

[illegible]

Total for
this page

3. $24 \div 4 =$



1 mark

4. $8 \times \square = 64 \div 2$



1 mark

5. $\frac{3}{8}$ of 16 =

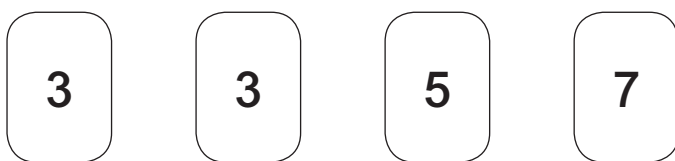


1 mark



Total for
this page

6. Write in order all the 3-digit numbers less than 400 that can be made using these digit cards.



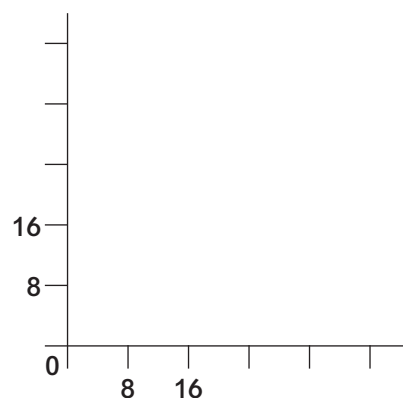
Start with the **smallest**. The first one has been done for you.

335



2 marks

7. The numbers on the axis of this graph go up in eights.
What numbers will come between twenty-four and fifty-six?



1 mark

8. Write these numbers in order of size, starting with the **largest** number.

462 246 426 264 624

largest

smallest



1 mark

9. Which is larger: three fives or four fours?

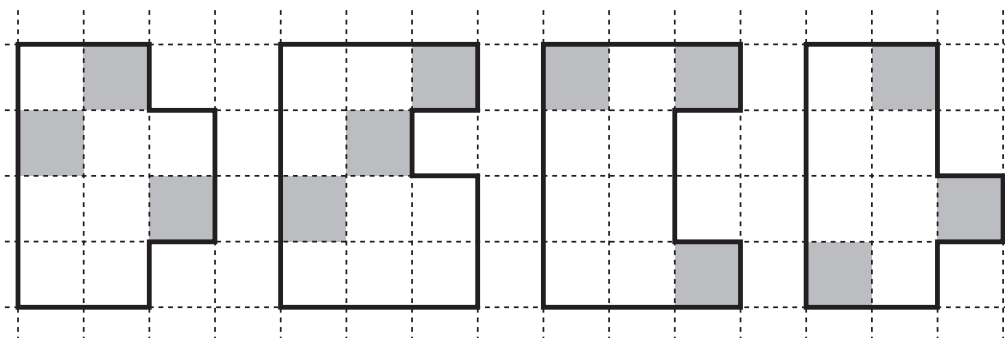


1 mark



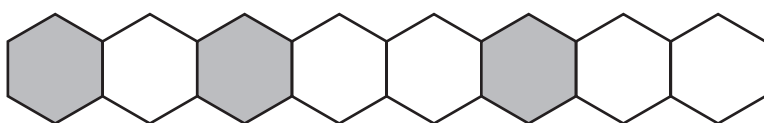
Total for this page

10. ✓ the shapes that have $\frac{3}{10}$ shaded.



1 mark

11. What fraction of this shape is shaded?






1 mark

12. Joe had 36 marbles.

He played a game and lost $\frac{3}{4}$ of his marbles.

How many does he have left?



2 marks

13. 36 children are on the school bus

$\frac{1}{4}$ of them are girls.

How many boys are on the bus?



1 mark



Total for
this page

14. This is Jane's diary for Tuesday.

Complete the table to show how time is recorded on 12-hour and 24-hour clocks.

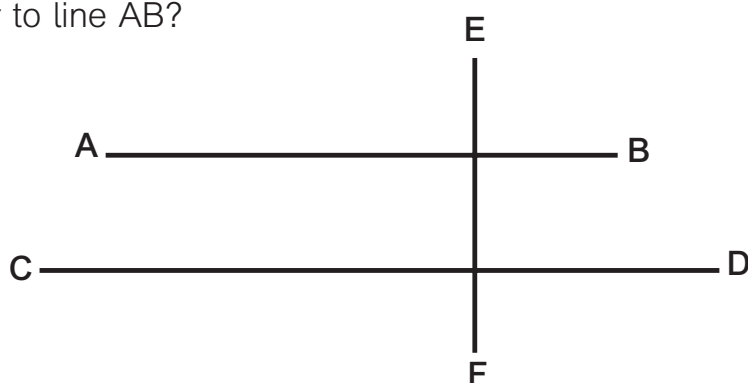
	Time	12-hour clock	24-hour clock
Get up	8 a.m.	8:00	08:00
Go to school	8.45 a.m.	8:45	
Return from school	4.20 p.m.		16:20
Go to bed		9:30	

☐

2 marks

15. Which line is perpendicular to line AB?

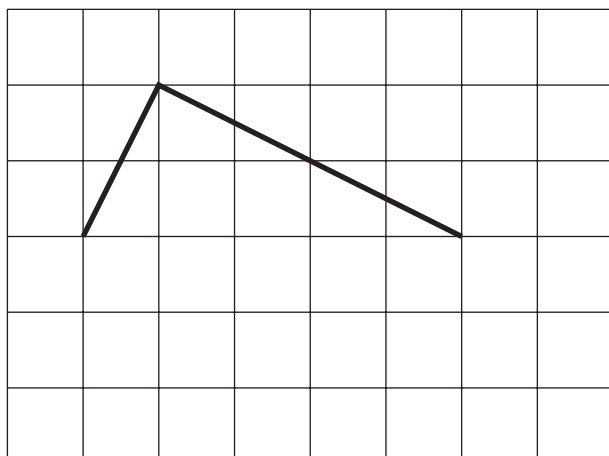
AB is perpendicular to


☐

1 mark

16. Two sides of a rectangle are drawn on a square grid.

Draw two more lines to complete the rectangle.






☐

1 mark

☐

Total for this page

17. Complete the pictogram to show this information about favourite pizza toppings.

Key:  represents 2 pizzas	
Cheese	  
Tuna	
Meat	

Cheese	6
Tuna	8
Meat	3



1 mark

/20

Total for this test